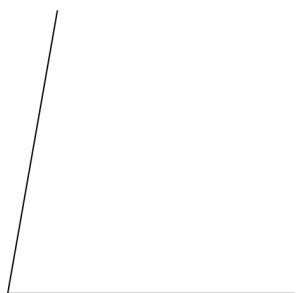


# Angles and Their Measures

Find the measure of each angle to the nearest degree.

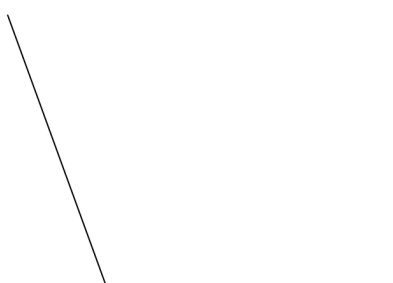
1)



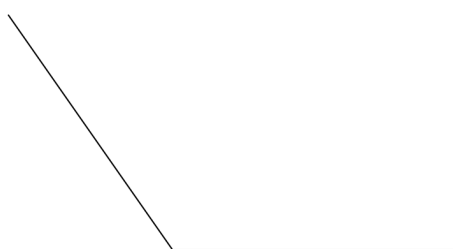
2)



3)



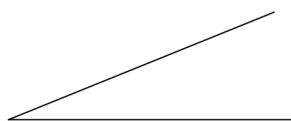
4)




5)




6)



7)



8)



9)



10)



11)  $90^\circ$



12)  $70^\circ$



13)  $120^\circ$



14)  $105^\circ$



15)  $31^\circ$



16)  $166^\circ$



17)  $144^\circ$



18)  $53^\circ$

