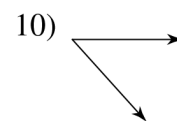
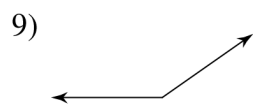
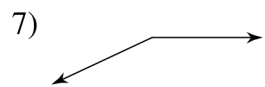
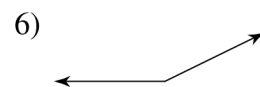
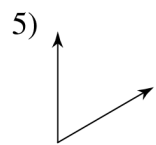
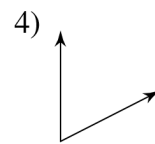
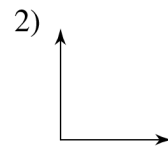
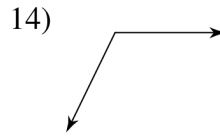
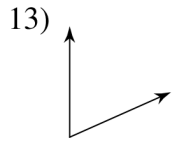
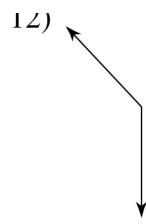
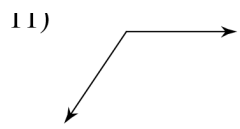


# Classifying Angles

Classify each angle as acute, obtuse, right, or straight.





15)  $16^\circ$

16)  $180^\circ$

17)  $90^\circ$

18)  $97^\circ$

19)  $59^\circ$

20)  $39^\circ$

21)  $119^\circ$

22)  $82^\circ$

23)  $162^\circ$

24)  $52^\circ$

25)  $15^\circ$

26)  $116^\circ$

27)  $96^\circ$

28)  $74^\circ$